

Mandeep  
4/9

## BUDHA DAL PUBLIC SCHOOL, PATIALA

Term-1

Subject: EVS 2

Session: 2023-24

Name- \_\_\_\_\_

Class - 3

Section- \_\_\_\_\_

Roll No. \_\_\_\_\_

SET - A

Date-08.09.23

Time- 3 hrs

M.M- 60

### I. Circle the correct options

(10)

1. Which of the following is an example of public transport?

- a) scooter    b) bicycle    c) bus    d) helicopter

2. India has \_\_\_\_\_ states.

- a) 27    b) 28    c) 29    d) 26

3. The capital of Nagaland is \_\_\_\_\_

- a) Kohima    b) Calcutta    c) Dehradun    d) Varanasi

4. A very useful and important invention was \_\_\_\_\_

- a) carriage    b) wheel    c) bullock cart    d) roads

5. Where did the early human beings live?

- a) on the roads    b) in rivers    c) in buildings    d) in caves

6. What did early human beings make using bones of animals?

- a) tools    b) weapons    c) jewellery    d) all of these

7. Which view of a place does a map show?

- a) top view    b) side view    c) upside down view    d) bottom view



8. \_\_\_\_\_ stands for  
a) danger      b) stop      c) recycle      d) no parking

9. Sahibzada Ajit Singh Nagar is the new name of  
a) Chandigarh      b) Mohali      c) Kolkata      d) Bengaluru

10. What is drawn to mark events in the order in which they took place?  
a) lifeline      b) number line      c) future      d) timeline

**II. Fill in the blanks:**

(5)

1. \_\_\_\_\_ is the largest Indian state.
2. A \_\_\_\_\_ is an instrument used to show directions.
3. The word 'history' comes from \_\_\_\_\_ language.
4. India is the world's \_\_\_\_\_ largest country.
5. \_\_\_\_\_ were sharp stones that were used to clean the skin of animals.

**III. Write true or false:**

(5)

1. An ape is an animal that is like a monkey but does not have a tail. \_\_\_\_\_
2. More than half of Indian people live in villages. \_\_\_\_\_
3. Early humans made clothes from skin of animals. \_\_\_\_\_
4. Someone who designs a building is known as a journalist. \_\_\_\_\_
5. Books are the oral source of history. \_\_\_\_\_

Match the column  
Educational f-

2. Symbols

3. Dehr-

4. D-

**Match the columns:**

(3)

1. Educational facility
2. Symbols and colours
3. Dehradun
4. Danger

- Chennai  
School, college  
key  
Uttarakhand

5. Madras



6. No parking



**V. Answer the following questions:**

1. What is a tool? Give an example.

(2)

---

---

---

2. Define a map.

(2)

---

---

3. How can history help a potter and a doctor with what they do? (2)

---

4. Why are landmarks useful? Give reasons.

(2)

5. How did early human beings learn to make fire?

(2)

6. Where is the central government of India located? Mention its main function.

(2)

7. How did early human beings start cooking their food?

(3)





Describe the work of an archaeologist.

(3)

9. Explain the duties of the government.

(3)





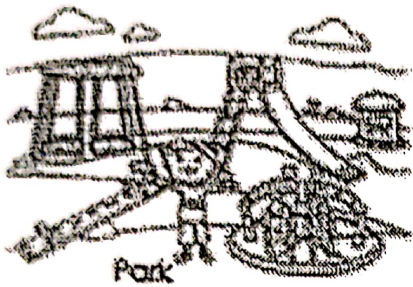
10. Early humans began farming and using the wheel. How has that helped modern humans?

or

Write 4 differences between a village and a city.

(4)

VI. Look at the map and answer the following questions.



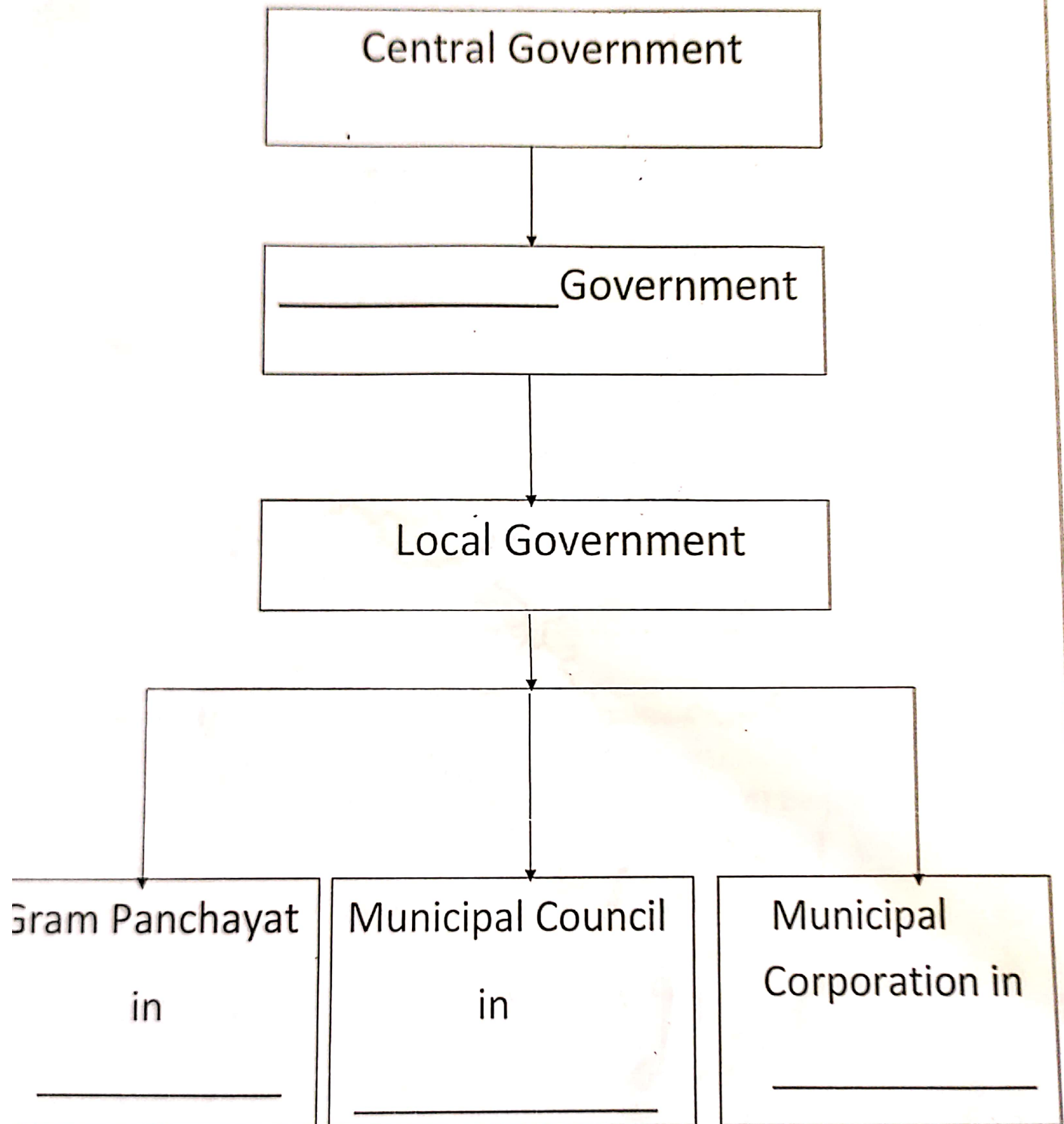
A) What is to the north of the bank? \_\_\_\_\_

B) What is to the west of the school? \_\_\_\_\_

C) What is to the east of the bank? \_\_\_\_\_

11. Complete the following chart:

(4)





VIII. Mark the following places on the map of India.

(5)

1. Punjab
2. Goa
3. Andaman and Nicobar
4. Kerala
5. Rajasthan



1  
e-  
No.  
me-3 hr